



## Time Calculations Worksheet






### SECTION 1: AM/PM and 24-Hour Time

Fill in the table below converting between AM/PM and 24-hour time

	<b>AM/PM</b>	<b>24 Hour</b>
<b>1</b>	<b>6:00 AM</b>	
<b>2</b>	<b>1:00 PM</b>	
<b>3</b>	<b>7:00 PM</b>	
<b>4</b>		<b>08:00</b>
<b>5</b>		<b>15:00</b>
<b>6</b>	<b>4:30 AM</b>	
<b>7</b>	<b>2:15 PM</b>	
<b>8</b>		<b>08:10</b>
<b>9</b>	<b>5:45 PM</b>	
<b>10</b>	<b>12:20 AM</b>	
<b>11</b>		<b>19:28</b>

### SECTION 1: Time Calculations

Draw your own time-lines to help fill in the gaps in the toy factory time table:

	<b>Job Start Time</b>	<b>Job Length</b>	<b>Job Finish Time</b>
	<b>2:30 PM</b>	<b>40 min</b>	
	<b>4:10 PM</b>	<b>1hr 15min</b>	
	<b>11:50 AM</b>	<b>2hr 20min</b>	
		<b>45min</b>	<b>4:05 PM</b>
	<b>4:20 PM</b>		<b>6:05 PM</b>