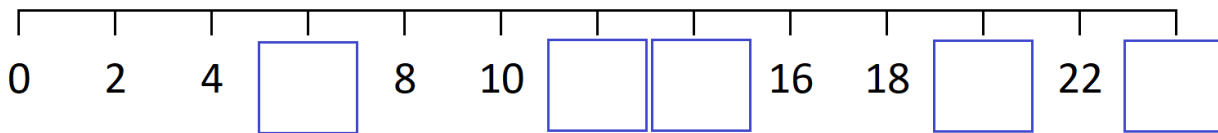
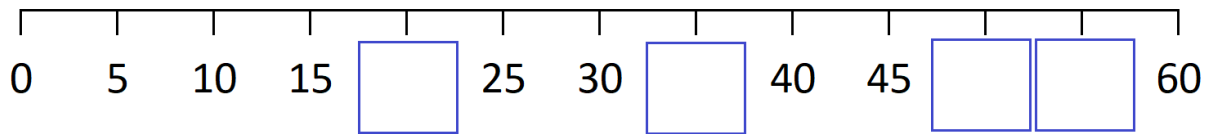
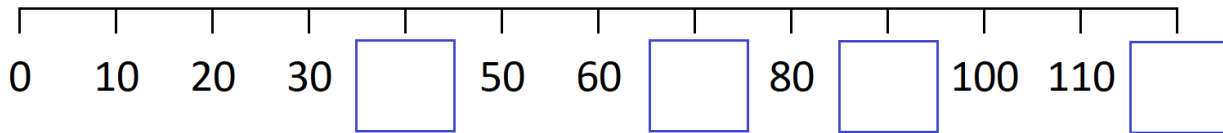
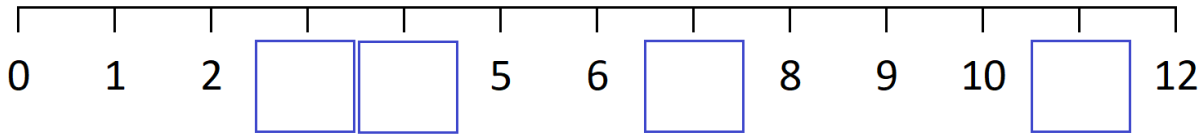


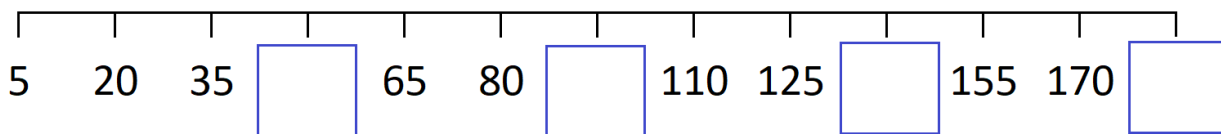
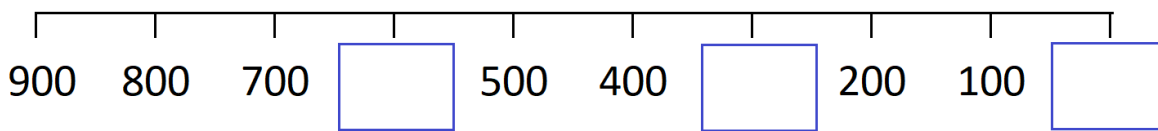
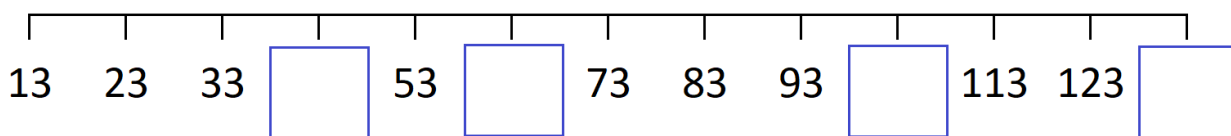
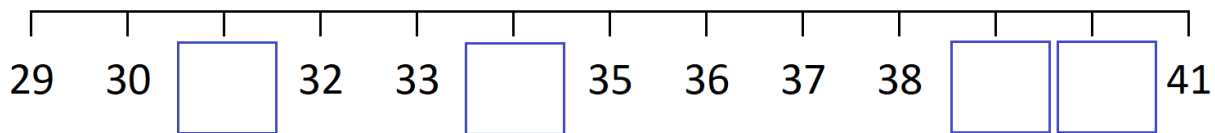


Number Lines starting from 0



What are we adding on each time?

Other Number Lines



What are we adding on each time?



Card Digits

Smallest

Largest

1)	<table border="1"><tr><td>3</td><td>7</td></tr></table>	3	7	_____	_____	
3	7					
2)	<table border="1"><tr><td>4</td><td>1</td></tr></table>	4	1	_____	_____	
4	1					
3)	<table border="1"><tr><td>6</td><td>8</td><td>1</td></tr></table>	6	8	1	_____	_____
6	8	1				
4)	<table border="1"><tr><td>5</td><td>2</td><td>9</td></tr></table>	5	2	9	_____	_____
5	2	9				
5)	<table border="1"><tr><td>7</td><td>1</td><td>2</td></tr></table>	7	1	2	_____	_____
7	1	2				
6)	<table border="1"><tr><td>4</td><td>4</td><td>7</td></tr></table>	4	4	7	_____	_____
4	4	7				



Largest Odd

Largest Even

_____	_____
_____	_____
_____	_____
_____	_____

Using Place Value for Addition



1) 20 + 30 = _____	1) 42 + 26 = _____	1) 43 + 28 = _____
2) 32 + 40 = _____	2) 68 + 11 = _____	2) 26 + 37 = _____
3) 50 + 16 = _____	3) 24 + 35 = _____	3) 68 + 26 = _____
4) 400 + 300 = _____	4) 13 + 15 = _____	4) 38 + 69 = _____
5) 70 + 36 = _____	5) 25 + 35 = _____	5) 124 + 395 = _____

Underwater Adventure - Search for the Missing Pearl!

Finding Agent 86: Name _____

The Closest Creature: Creature: _____

A Weighty Chest: Chest colour with the pearl in: _____

