

Please write clearly in block capitals.

Centre number

--	--	--	--	--

Candidate number

--	--	--	--

Surname

Forename(s)

Candidate signature

I declare this is my own work.

GCSE MATHEMATICS

H

Higher Tier

Paper 1 Non-Calculator

Tuesday 19 May 2020

Morning

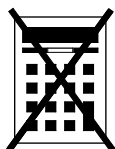
Time allowed: 1 hour 30 minutes

Materials

For this paper you must have:

- mathematical instruments.

You must **not** use a calculator.



Instructions

- Use black ink or black ball-point pen. Draw diagrams in pencil.
- Fill in the boxes at the top of this page.
- Answer **all** questions.
- You must answer the questions in the spaces provided. Do not write outside the box around each page or on blank pages.
- If you need extra space for your answer(s), use the lined pages at the end of this book. Write the question number against your answer(s).
- Do all rough work in this book. Cross through any work you do not want to be marked.

Information

- The marks for questions are shown in brackets.
- The maximum mark for this paper is 80.
- You may ask for more answer paper, graph paper and tracing paper. These must be tagged securely to this answer book.

For Examiner's Use

Pages	Mark
2–3	
4–5	
6–7	
8–9	
10–11	
12–13	
14–15	
16–17	
18–19	
20–21	
22–23	
24–25	
TOTAL	

Advice

In all calculations, show clearly how you work out your answer.



JUN2083001H01

Answer **all** questions in the spaces provided.

Do not write
outside the
box

1 Circle the fraction that is equivalent to 4.75

[1 mark]

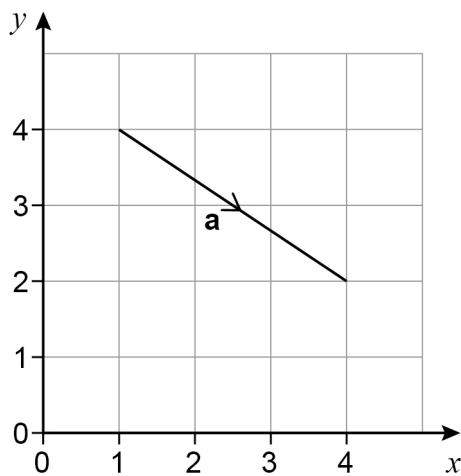
$$\frac{15}{4}$$

$$\frac{19}{4}$$

$$\frac{21}{4}$$

$$\frac{23}{4}$$

2 Here is vector **a**.



Circle the column vector that represents **a**.

[1 mark]

$$\begin{pmatrix} 3 \\ 2 \end{pmatrix}$$

$$\begin{pmatrix} -3 \\ 2 \end{pmatrix}$$

$$\begin{pmatrix} 3 \\ -2 \end{pmatrix}$$

$$\begin{pmatrix} -3 \\ -2 \end{pmatrix}$$

3 Which one of these is a square number **and** a cube number?

Circle your answer.

[1 mark]

100

1000

10 000

1 000 000



4 Circle the reciprocal of $\frac{5}{6}$

[1 mark]

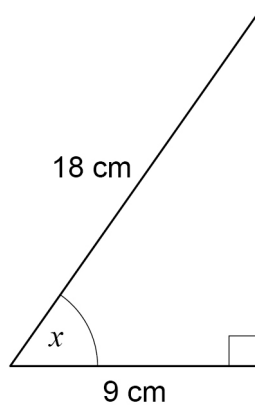
$$\frac{6}{5}$$

$$\frac{1}{6}$$

$$-\frac{1}{6}$$

$$-\frac{6}{5}$$

5 Use trigonometry to work out the size of angle x .



Not drawn
accurately

[2 marks]

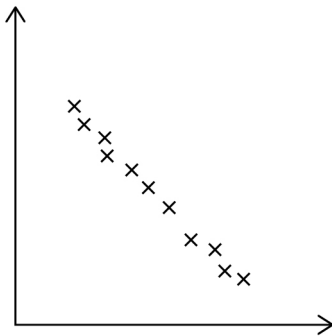
Answer _____ degrees



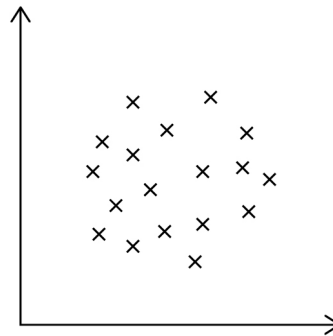
6

A and B are scatter graphs.

Graph A



Graph B



What type of correlation is shown by each graph?

Choose from

Weak positive
Strong positive
Weak negative
Strong negative
No correlation

[2 marks]

Graph A _____

Graph B _____



7 Here is some information about 80 people who play in bands.

12 are singers but not guitar players.

30% are neither a singer nor a guitar player.

$\frac{1}{4}$ of the guitar players are also singers.

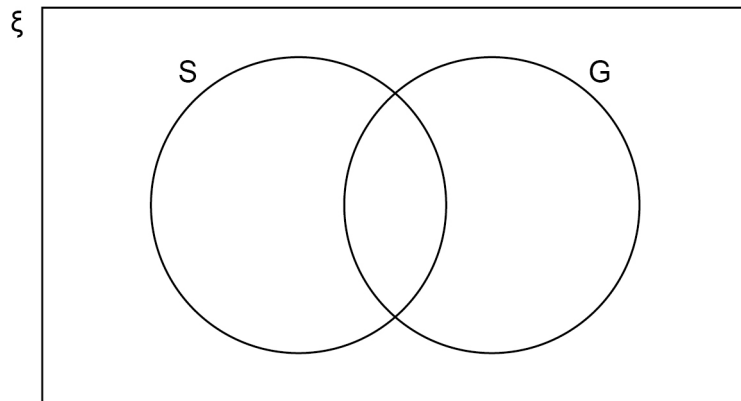
Complete this Venn diagram to represent the information.

[4 marks]

ξ = 80 people who play in bands

S = singers

G = guitar players






8

The shorter side of a parallelogram has length 6.5 cm

Not drawn
accurately



The length of the shorter side is $\frac{1}{9}$ of the perimeter.

Work out the length of the longer side.

[3 marks]

Answer _____ cm



- 9 (a) All the terms of a **geometric** progression are positive.
The second and fourth terms are shown.

..... 4 16

Work out the first and third terms.

[2 marks]

First term _____

Third term _____

- 9 (b) The first two terms of an **arithmetic** progression are shown.

p $5p$

The sum of the first three terms is 90

Work out the value of p .

[3 marks]

Answer _____



10

The cost of a holiday is £2400

Rana pays a deposit followed by monthly payments, in the ratio

deposit : total of the monthly payments = 3 : 5

She makes 6 equal monthly payments.

Work out her monthly payment.

[4 marks]

Answer £ _____



11 As a decimal $\frac{11}{40} = 0.275$

Work out $\frac{33}{400}$ as a decimal.


[2 marks]

Answer _____

Turn over for the next question



- 12** Two wire shapes make an earring.
The shapes are
a circle with radius 21 mm
and
a quarter circle.



Not drawn
accurately

radius of circle : radius of quarter circle = 7 : 2

- 12 (a)** Show that the radius of the quarter circle is 6 mm

[1 mark]



12 (b) Work out the **total** length of the wire in the earring.

Give your answer in the form $a\pi + b$ where a and b are integers.

[4 marks]

Answer _____ mm

Turn over for the next question



13 (a) s and t are **positive** integers.

$(x + s)(x - t)$ is expanded and simplified.

The answer is $x^2 + kx - 40$ where k is a positive integer.

Work out the **smallest** possible value of k .

[2 marks]

Answer _____

13 (b) Faisal tries to solve $(x + 2)(x - 7) = 0$

Here is his working.

	$(x + 2) = 0$	or	$(x - 7) = 0$
Answer	$x = 2$	or	$x = 7$

Give a reason why his answer is wrong.

[1 mark]



14 (a) $c = 2^{10} \times 3 \times 5^6$

Work out $18c$.

Give your answer as a product of prime factors in index form.

[2 marks]

Answer _____

14 (b) Work out $\sqrt[3]{\frac{2^7 \times 11^3}{2}}$

Give your answer as an integer.

[2 marks]

Answer _____

7

Turn over ►



15 $3x = \frac{1}{2}y$

Circle the ratio $x : y$

[1 mark]

6 : 1

1 : 6

3 : 2

2 : 3

16 A sequence of numbers is formed by the iterative process

$$u_{n+1} = \frac{4}{u_n - 1} \quad u_1 = 9$$

Work out the values of u_2 and u_3

[2 marks]

$$u_2 = \underline{\hspace{10cm}}$$

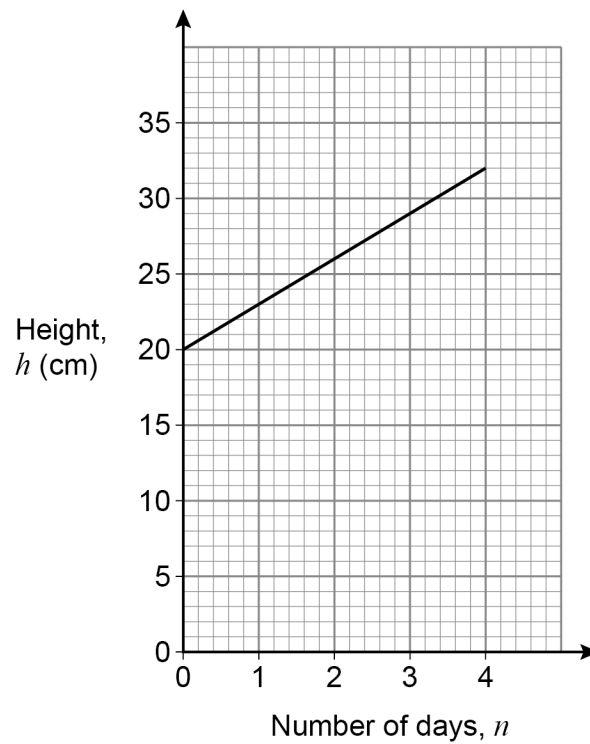
$$u_3 = \underline{\hspace{10cm}}$$



17

Jim buys a plant of height 20 cm

The graph shows how the height of the plant changes during the next 4 days.



Work out a formula for h in terms of n .

[3 marks]

Answer _____



18

Solve the simultaneous equations

$$2x + 4y = -9$$

$$2y = 4x - 7$$

[4 marks]

$$x = \underline{\hspace{2cm}} \quad y = \underline{\hspace{2cm}}$$



- 19 Circle the expression that is equivalent to $\frac{x}{5} + \frac{x}{10}$ [1 mark]

$$\frac{3x}{10}$$

$$\frac{2x}{15}$$

$$\frac{x}{25}$$

$$\frac{x^2}{50}$$

- 20 (a) Write down the value of 7^0 [1 mark]

Answer _____

- 20 (b) Work out the value of $32^{-\frac{3}{5}}$ [2 marks]

Answer _____

Turn over for the next question



21

Write these numbers in order of size.

15.6

 $3\sqrt{23}$ 2.1^4 $\frac{47}{3}$

Start with the smallest.

[2 marks]

Smallest _____

Largest _____



22 (a) y is directly proportional to x^3

$$y = 17 \quad \text{when} \quad x = 4$$

Work out an equation connecting y and x .

[3 marks]

Answer _____

22 (b) m is inversely proportional to \sqrt{r}

The value of r is multiplied by 4

Circle what happens to the value of m .

[1 mark]

$\times 2$

$\times 16$

$\div 2$

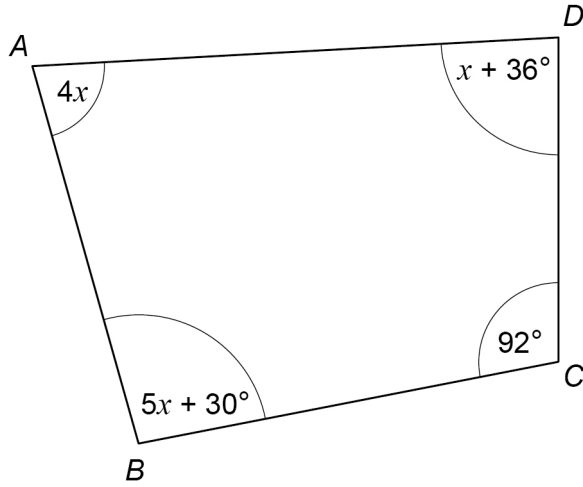
$\div 16$

Turn over for the next question



23 $ABCD$ is a quadrilateral.

Not drawn
accurately



Prove that $ABCD$ is **not** a cyclic quadrilateral.

[4 marks]



24

 y is an obtuse angle.

Which statement is true?

Tick **one** box.

[1 mark]

 $\sin y > 0$ and $\cos y > 0$ $\sin y > 0$ and $\cos y < 0$ $\sin y < 0$ and $\cos y > 0$ $\sin y < 0$ and $\cos y < 0$

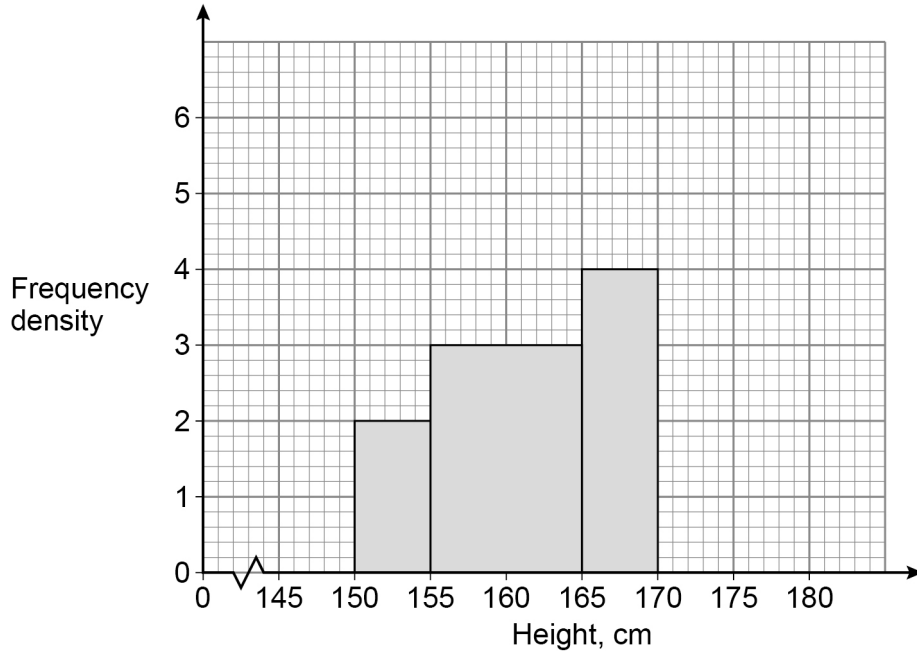
Turn over for the next question

5

Turn over ►



25 A histogram is drawn to represent the heights of a sample of women.
Three of the four bars are shown.
The bar for $170 \text{ cm} \leq \text{height} < 180 \text{ cm}$ is missing.



There are 74 women in the sample.

Complete the histogram.

[4 marks]



26 (a) Show that $\frac{14}{\sqrt{7}}$ can be written in the form $a\sqrt{b}$ where a and b are integers.

[2 marks]

26 (b) Work out $2\sqrt{10} \times \sqrt{80} \times \sqrt{18}$
Give your answer as an integer.

[3 marks]

Answer _____

Turn over for the next question



27 A and B are similar solid cylinders.

$$\text{base area of A : base area of B} = 9 : 25$$

Complete these ratios.

[2 marks]

curved surface area of A : curved surface area of B = _____ : _____

height of A : height of B = _____ : _____

28 Factorise fully $144 - 4x^2$

[2 marks]

Answer _____



29

The graph of $y = x^3 + 6$ is translated 4 units to the right.

The translated graph has equation $y = f(x)$

Work out $f(x)$.

Give your answer in the form $x^3 + ax^2 + bx + c$ where a , b and c are integers.

[4 marks]

Answer _____

END OF QUESTIONS



There are no questions printed on this page

*Do not write
outside the
box*

**DO NOT WRITE ON THIS PAGE
ANSWER IN THE SPACES PROVIDED**



Do not write outside the box

Question number	<p style="text-align: center;">Additional page, if required. Write the question numbers in the left-hand margin.</p>
	<hr/> <hr/> <hr/> <hr/> <hr/> <hr/> <hr/> <hr/> <hr/> <hr/> <hr/> <hr/> <hr/> <hr/> <hr/> <hr/> <hr/> <hr/> <hr/> <hr/> <hr/> <hr/> <hr/>
	<p>Copyright information</p> <p>For confidentiality purposes, all acknowledgements of third-party copyright material are published in a separate booklet. This booklet is published after each live examination series and is available for free download from www.aqa.org.uk.</p> <p>Permission to reproduce all copyright material has been applied for. In some cases, efforts to contact copyright-holders may have been unsuccessful and AQA will be happy to rectify any omissions of acknowledgements. If you have any queries please contact the Copyright Team.</p> <p>Copyright © 2020 AQA and its licensors. All rights reserved.</p>

